


# Pièces de monnaie manquantes

Complète chaque équation. Puis dessine les pièces de monnaie qui manquent.




+



$$25 \text{ ¢} + \underline{\hspace{2cm}} = 30 \text{ ¢}$$




+



$$5 \text{ ¢} + \underline{\hspace{2cm}} = 50 \text{ ¢}$$




+



$$40 \text{ ¢} + \underline{\hspace{2cm}} = 80 \text{ ¢}$$




+



$$10 \text{ ¢} + \underline{\hspace{2cm}} = 65 \text{ ¢}$$




+



$$50 \text{ ¢} + \underline{\hspace{2cm}} = 1 \text{ \$}$$



+



$$20 \text{ ¢} + \underline{\hspace{2cm}} = 75 \text{ ¢}$$

