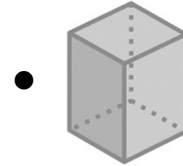


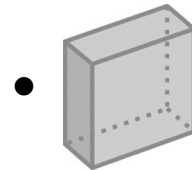
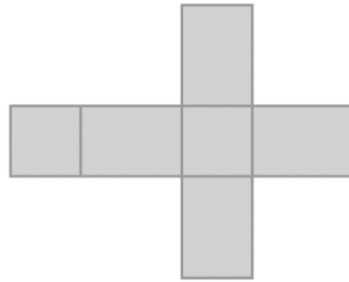
À la découverte des solides

1 Relie chaque développement au bon nom de solide et à la bonne illustration.

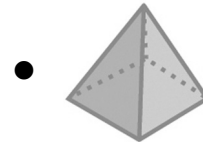
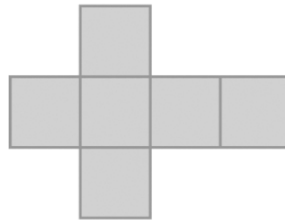
Un cube •



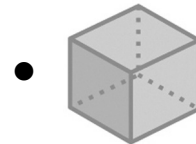
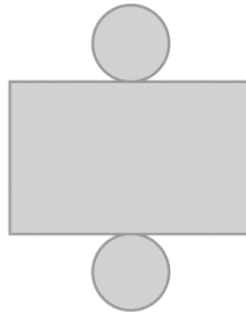
Une pyramide à base triangulaire •



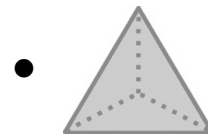
Un cylindre •



Un prisme à base rectangulaire •



Un prisme à base carrée •



Une pyramide à base carrée •

